
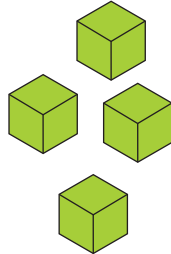
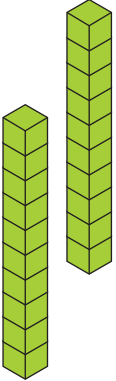


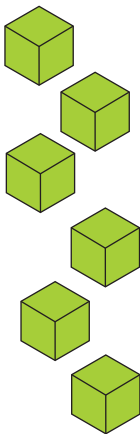


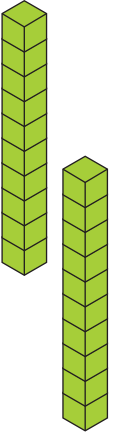

Place Value


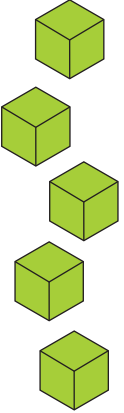
Directions: Write how many groups of tens and ones there are?

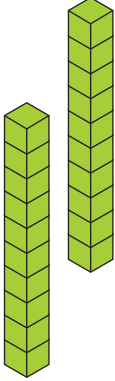

| Tens | Ones |
|---|---|
|  |  |
| <input type="text"/> | <input type="text"/> |

| Tens | Ones |
|---|---|
|  |  |
| <input type="text"/> | <input type="text"/> |

| Tens | Ones |
|---|---|
|  |  |
| <input type="text"/> | <input type="text"/> |

| Tens | Ones |
|---|---|
|  |  |
| <input type="text"/> | <input type="text"/> |

| Tens | Ones |
|---|---|
|  |  |
| <input type="text"/> | <input type="text"/> |

| Tens | Ones |
|---|---|
|  |  |
| <input type="text"/> | <input type="text"/> |